




A day at the beach - group 10s and count by 10s

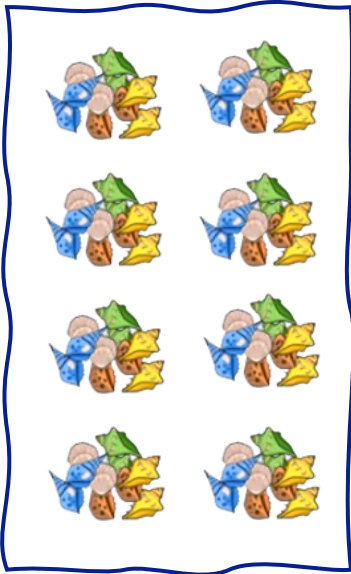
Count and write the number of seashells



—



—



—



—

How many seashells are there in total?





Visit us for much more at mightyowl.com



A day at the beach - group 10s and count by 10s








Fill in the missing numbers


skip counting

10, 20, , 40, 50, , 70, , 90, 

30, , , 60, , , 90

, 50, , 30, , 

10, , , , 50, , , , , 100



Visit us for much more at mightyowl.com