




Pattern recognition – number and shape patterns

For each pattern, draw the next two shapes.



For each number sequence, identify the next three numbers.



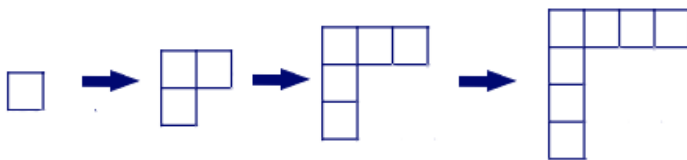
3, 6, 12, 24, _____, _____, _____

4, 9, 14, 19, _____, _____, _____

50, 43, 36, 29, _____, _____, _____



For each pattern, identify the rule.




Visit us for much more at mightyowl.com



Pattern recognition – number and shape patterns

Every dandelion that Isabella plucks from her yard, the number of dandelions triples the next day. If she starts out with 2 dandelions on the first day, and plucks all of them each day, how many dandelions will there be on the 5th day?

A large rectangular box with a wavy orange border, containing five horizontal orange lines for writing.

Lucas's grandfather has a jar of jellybeans, and everytime Lucas visits, his grandfather gives him 4 more jellybeans than last time. On Monday Lucas has 15 jellybeans. If he doesn't eat any jellybeans, how many will Lucas have on Friday?

A large rectangular box with a wavy blue border, containing five horizontal blue lines for writing.