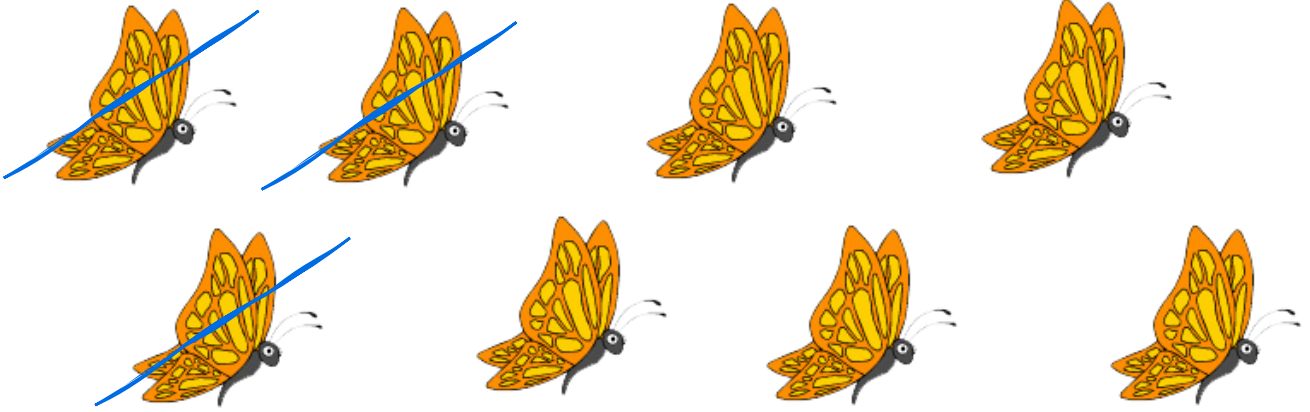





# Take it away: introduction to subtraction

Write how many butterflies and frogs are left



$$7 - \square = \square$$



$$9 - \square = \square$$

Visit us for much more at [mightyowl.com](https://mightyowl.com)




# Take it away: introduction to subtraction

Cross out 3 biscuits and write how many are left.



$$10 - \square = \square$$

Cross out 4 sandwiches and write how many are left.



$$10 - \square = \square$$

Visit us for much more at [mightyowl.com](http://mightyowl.com)