




Dice game: properties of addition

Add the numbers on the dice to create two different number sentences




$$\square + \square = \square$$

$$\square + \square = \square$$

$$\square + \square = \square$$

$$\square + \square = \square$$



Add the numbers on the dice. Circle the dice that make a 10 or doubles fact

Example



$$4 + 6 + 1 = 11$$

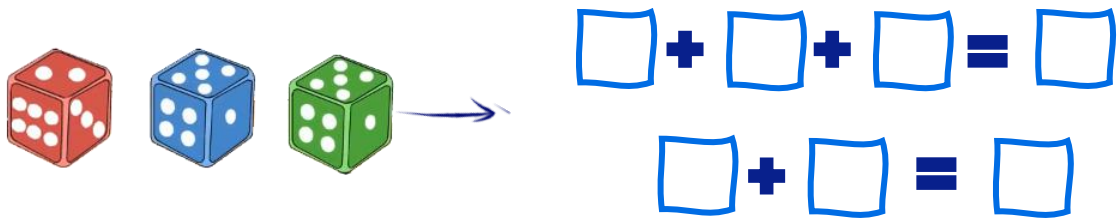
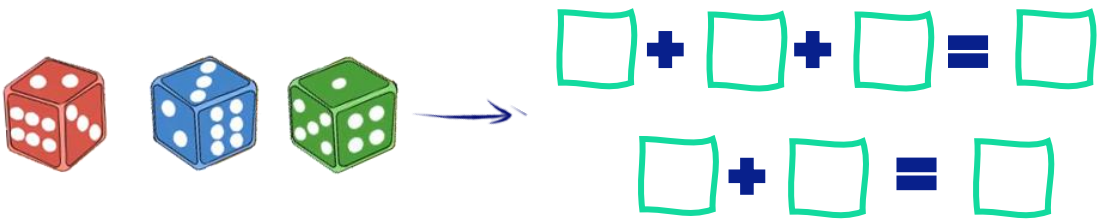
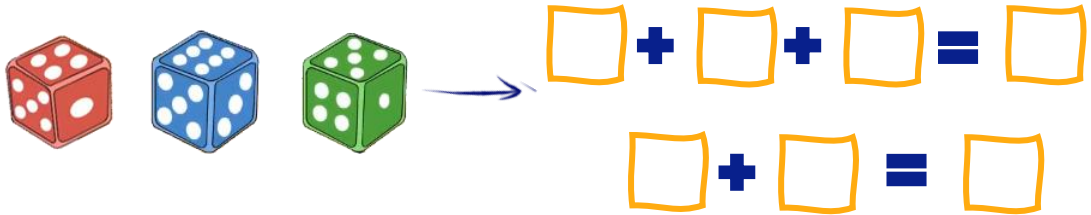
$$10 + 1 = 11$$





Visit us for much more at mightyowl.com



Dice game: properties of addition



Bonus: Do you have dice at home? Roll dice to create your own problem!



Visit us for much more at mightyowl.com