

Write your name here

Surname

Other names

Edexcel
Functional Skills

Centre Number

| | | | | |
|--|--|--|--|--|
| | | | | |
|--|--|--|--|--|

Candidate Number

| | | | |
|--|--|--|--|
| | | | |
|--|--|--|--|

Mathematics

Level 1



13–17 May 2013

Time: 1 hour 30 minutes

Paper Reference

FSM01/01

You must have:

Pen, calculator, HB pencil, eraser, ruler graduated in cm and mm, protractor, compasses.

Total Marks

| |
|--|
| |
|--|

My signature confirms that I will not discuss the content of the test with anyone until the end of the 5 day test window.

Signature: _____

Instructions

- Use **black** ink or ball-point pen.
- **Fill in the boxes** at the top of this page with your name, centre number and candidate number.
- Sign the declaration.
- Answer **all** questions.
- Answer the questions in the spaces provided – *there may be more space than you need.*
- **Calculators may be used.**

Information

- The total mark for this paper is 48.
- The marks for each question are shown in brackets – *use this as a guide as to how much time to spend on each question.*
- **Where you see this sign you must show clearly how you get your answers because marks will be awarded for your working out.**
- **Check your working and your answers at each stage.**



Advice

- Read each question carefully before you start to answer it.
- Keep an eye on the time.

Turn over ►

P42456A

©2013 Pearson Education Ltd.

1/1/1



PEARSON

SECTION A: The conference

Answer all questions in this section.

Write your answers in the spaces provided.

- 1 Ben Jones is going to a conference about the environment in Munich. Emma is Ben's personal assistant. She is going to book a hotel for him.

Ben is going to fly to Munich in the morning on Monday 15th July. He will fly home on Friday 19th July.

| July | | | | | | |
|--------|---------|-----------|----------|--------|----------|--------|
| Monday | Tuesday | Wednesday | Thursday | Friday | Saturday | Sunday |
| 1 | 2 | 3 | 4 | 5 | 6 | 7 |
| 8 | 9 | 10 | 11 | 12 | 13 | 14 |
| 15 | 16 | 17 | 18 | 19 | 20 | 21 |
| 22 | 23 | 24 | 25 | 26 | 27 | 28 |
| 29 | 30 | 31 | | | | |

(a) Which nights should Emma book?

(1)

Write your answer in the box below.

These hotels in Munich have special prices for the conference.

Hotel Splendide
€129 each night

Conference offer
2 nights for the price of 1

Hotel Royal
€91 each night

Conference discount
€35 off each night

Emma wants to book the cheapest hotel for Ben.

(b) Which hotel should Emma book?
Remember to check your calculations.

(5)



Use the box below to show clearly how you get your answer.

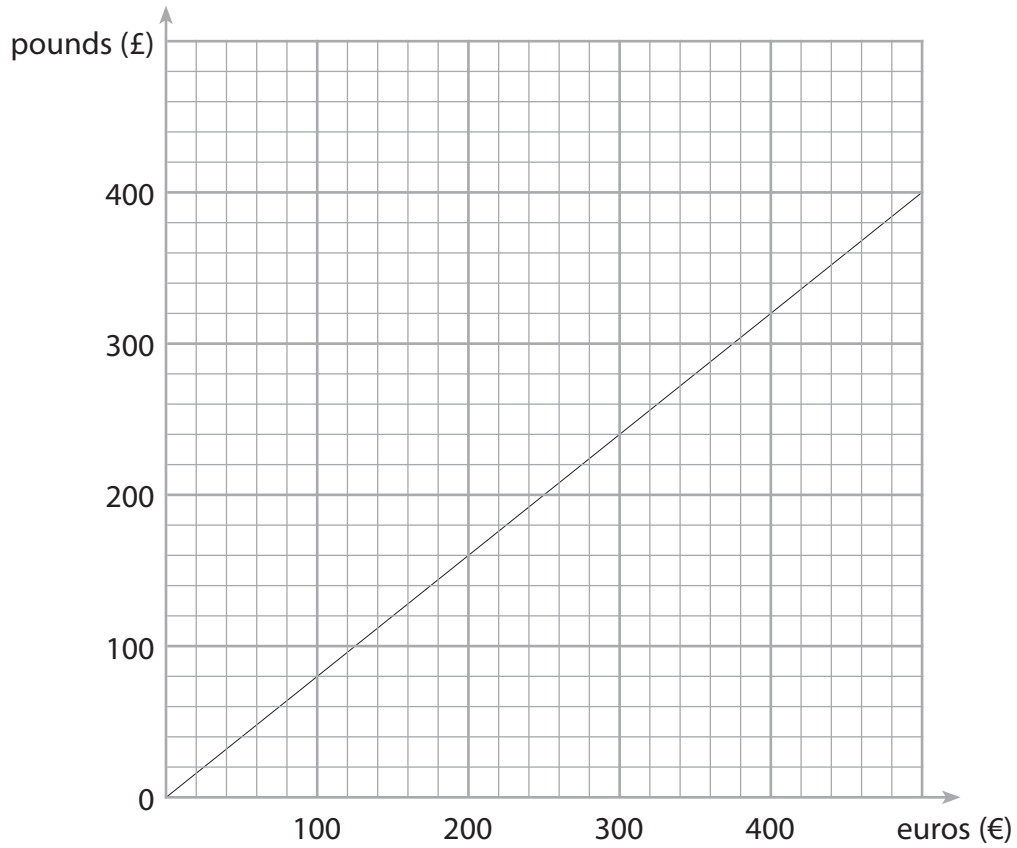


A large, empty rectangular box with rounded corners, intended for students to show their work.



Emma wants to know how much £200 is in euros.

She finds this graph to help her convert between euros (€) and pounds (£).



(c) Use the graph to convert £200 to euros.

(2)

Write your answer in the box below.

(Total for Question 1 is 8 marks)



2 Ben can take up to 20 kg of luggage on the plane.

His packed suitcase has a weight of 12.6 kg.

He also wants to take

- a laptop with a weight of 3 kg
- some files with a total weight of 3.8 kg

(a) Can Ben take all of this luggage on the plane?

(2)

Use the box below to show clearly how you get your answer.



A large empty rectangular box for the student to show their working out.



The conference finishes at 3.30 pm.

It takes 50 minutes to drive from the conference centre to Munich airport.

Ben must be at the airport at least 1 hour before his flight.

The timetable shows the times of the flights from Munich.

| Flight number | Leaves Munich |
|---------------|---------------|
| AC123 | 09:05 |
| JK432 | 15:25 |
| AC302 | 16:20 |
| AC498 | 17:35 |
| JK101 | 20:30 |
| AC007 | 21:35 |

Ben wants to get the earliest possible flight after the conference.

Emma needs to book a flight for Ben.

(b) Which flight should Emma book?

(3)

Use the box below to show clearly how you get your answer.



(Total for Question 2 is 5 marks)



3 There will be a total of 9 workshops at the conference on Thursday.

The first 3 workshops start at 9 am.
All the workshops take 1 hour.
The workshops must finish by 1 pm.

These are the rooms for the workshops.

The Berlin Room

The Duren Room

The Hamburg Room

The table shows the workshops and the leaders.

| Workshop | Leader | Number of workshops |
|--------------------|--------------|---------------------|
| Recycling (R) | Manfred (M) | 3 |
| Global warming (G) | Katerina (K) | 2 |
| Transport (T) | Clara (C) | 2 |
| Energy (E) | Paul (P) | 2 |

Make a plan for the workshops on Thursday.
Your plan must show the time and the room for each workshop.

(3)

Write your plan in the box below.

(Total for Question 3 is 3 marks)



SECTION B: Ponies


Answer all questions in this section.

Write your answers in the spaces provided.

4 Hal buys a pony.

He knows the height of a pony is measured in hands.
The advert in the paper says,

'Pony for sale, height 14 hands.'



Hal thinks 14 hands is the same as 5 feet.

He finds this method for changing hands into feet.



(a) Is Hal correct?

Show why you think this.

(3)

Use the box below to show clearly how you get your answer.



Large empty box for showing the solution.



Hal knows the pony needs hay and corn in the ratio 3:1

He gives 2 kg of corn to the pony.

(b) What weight of hay should Hal give to the pony?

(2)

Use the box below to show clearly how you get your answer.



A large empty rectangular box for writing the solution to the problem.

(Total for Question 4 is 5 marks)



5 Hal buys two more ponies.

He wants to build three stables in his barn for the ponies.

The floor of each stable must be a rectangle with sides 300 cm by 400 cm
Each stable must have a door.

The barn must have a pathway 200 cm wide so that the ponies can walk from their stables out of the barn door.


The door of each stable must open onto the pathway.

Hal draws a plan of the barn on a grid.

(a) Draw the 3 stables and the pathway on the grid.

(4)





Barn door

Key: 1 square on the grid is 50 cm in the barn



Hal has a field where he can keep the ponies.

The area of the field is $14\,970\text{ m}^2$

Each pony needs an area of 5000 m^2

(b) Is the field large enough to keep 3 ponies?
Show a check for your answer.

(3)

Use the box below to show clearly how you get your answer.



A large empty rectangular box for the student to show their work and calculations.

(Total for Question 5 is 7 marks)



6



Hal wants to work out the cost of horse shoes for the 3 ponies.

It costs £55 to put new horse shoes on a pony.

Hal's ponies need new horse shoes every 6 weeks.

Hal works out the cost for 1 year (52 weeks).

Work out the total cost of horse shoes for the 3 ponies for 1 year.

(4)

Use the box below to show clearly how you get your answer.



(Total for Question 6 is 4 marks)



SECTION C: The cafe

Answer all questions in this section.

Write your answers in the spaces provided.

7 Asaf owns a cafe.

He wants a display about the breakfast foods he sells.
Asaf finds this information.

| Breakfast food | Egg | Bacon | Sausage | Mushrooms | Toast |
|---------------------------|-----|-------|---------|-----------|-------|
| Calories (per portion) | 66 | 120 | 76 | 62 | 84 |

(a) What is the range of the number of calories for these breakfast foods?

(1)

Write your answer in the box below.

Asaf works out that the average number of calories for his breakfast foods is 80

(b) Is Asaf correct?
Show why you think this.


(3)

Use the box below to show clearly how you get your answer.



(c) Draw a graph or chart to display the number of calories in each breakfast food.

(3)



(Total for Question 7 is 7 marks)



P 4 2 4 5 6 A 0 1 5 2 0

8 Asaf wants a data collection sheet to record breakfast orders.

The breakfast menu has a choice of

egg
bacon
sausage
mushrooms
toast.

There are 4 places at each table in the cafe.

The data collection sheet must show

- the table number
- the food ordered by each customer.

Design a data collection sheet for Asaf.

(3)



Use the box below to show your data collection sheet.

(Total for Question 8 is 3 marks)



9

| <i>Price List</i> | | | |
|---------------------------------|--------------|--------------------|--------------|
| <i>Food menu</i> | | <i>Drinks menu</i> | |
| <i>Sandwiches</i> | <i>£2.35</i> | <i>Coffee</i> | <i>£1.45</i> |
| <i>Pie and chips</i> | <i>£3.45</i> | <i>Tea</i> | <i>95p</i> |
| <i>Vegetable curry and rice</i> | <i>£2.90</i> | <i>Fruit juice</i> | <i>95p</i> |
| <i>Jacket potatoes (filled)</i> | <i>£3.15</i> | <i>Cans</i> | <i>70p</i> |
| <i>Sausage, beans and chips</i> | <i>£3.50</i> | | |

Destiny visits the cafe with a friend.
She only has £7.50 to spend.
Destiny wants to buy an item of food and a drink for each of them.

- (a) Choose food items and drinks for Destiny and her friend.
Remember to check that she can afford these items. (3)

Use the box below to show clearly how you get your answer.



Asaf puts up this notice.

Lunch Time Special
Sausage, beans and chips £3.50
Kids eat for half price

Mrs Bright comes into the cafe with her grandson Alfie (age 6).

She thinks the Lunch Time Special for herself and Alfie will cost less than £5

(b) Is Mrs Bright correct?
Show why you think this.

(3)

Use the box below to show clearly how you get your answer.



(Total for Question 9 is 6 marks)

TOTAL FOR PAPER IS 48 MARKS



BLANK PAGE

